

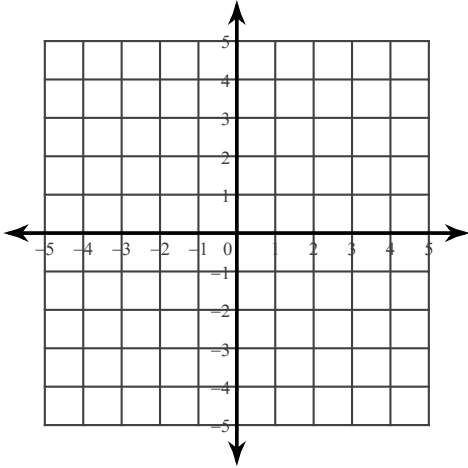
Systems of Equations Practice- all methods

© 2016 Kuta Software LLC. All rights reserved.

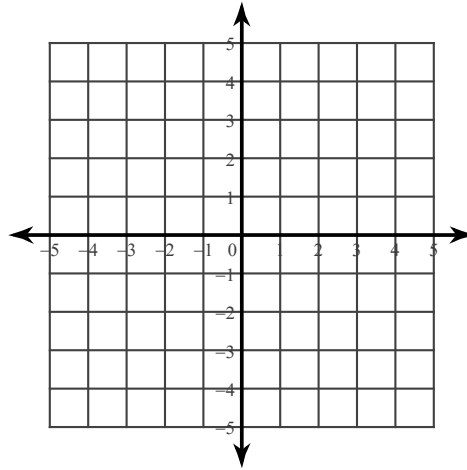
Solve each system by graphing.

1) $y = -\frac{1}{4}x - 4$

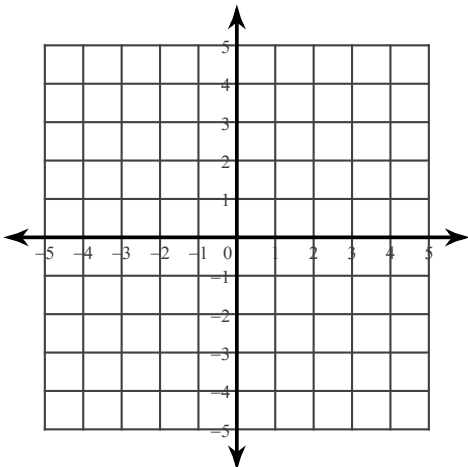
$y = \frac{5}{4}x + 2$



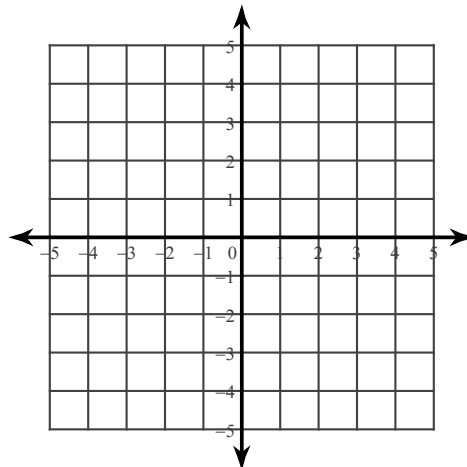
2) $y = 2x + 3$
 $y = -4x - 3$



3) $7x - y = 3$
 $x - y = -3$



4) $3x + 4y = 4$
 $3x + 4y = -16$



Solve each system by substitution.

5) $x + 8y = -15$
 $7x + 8y = -9$

6) $-5x - 7y = 11$
 $x - 2y = -9$

7) $y = -7x + 1$
 $5x + 4y = -19$

8) $-9x - 3y = -2$
 $y = -3x - 4$

Solve each system by elimination.

9) $6x + 2y = -6$
 $7x + 4y = 8$

10) $5x + 3y = 15$
 $10x + 6y = 20$

11) $-6x - 9y = 0$
 $-24x = 36y$

12) $-3 - 3y = 12x$
 $-5 - y = 2x$

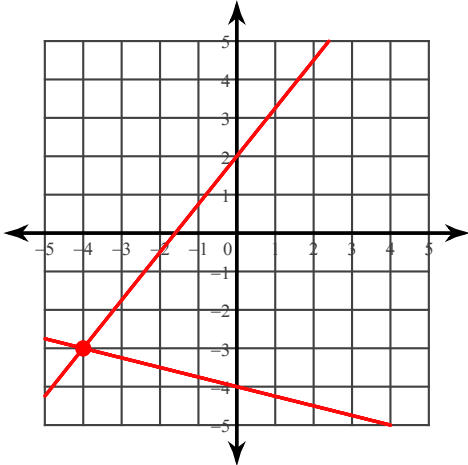
Systems of Equations Practice- all methods

© 2016 Kuta Software LLC. All rights reserved.

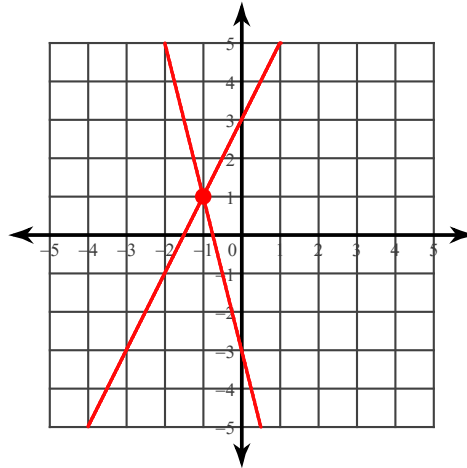
Solve each system by graphing.

1) $y = -\frac{1}{4}x - 4$

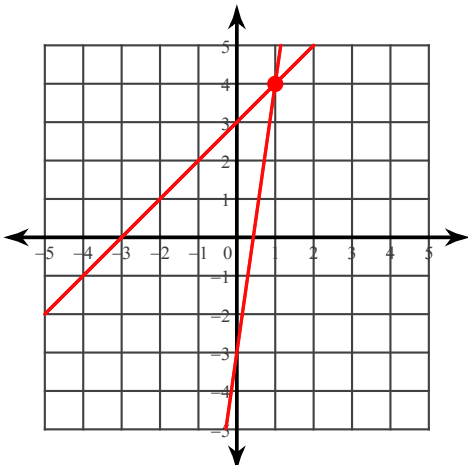
$y = \frac{5}{4}x + 2$

 $(-4, -3)$

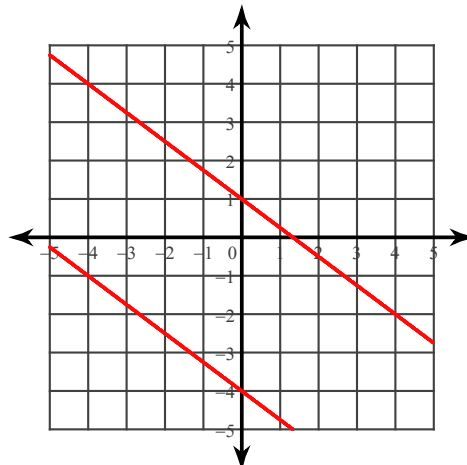
2) $y = 2x + 3$
 $y = -4x - 3$

 $(-1, 1)$

3) $7x - y = 3$
 $x - y = -3$

 $(1, 4)$

4) $3x + 4y = 4$
 $3x + 4y = -16$



No solution

Solve each system by substitution.

5) $x + 8y = -15$
 $7x + 8y = -9$

$(1, -2)$

6) $-5x - 7y = 11$
 $x - 2y = -9$

$(-5, 2)$

7) $y = -7x + 1$
 $5x + 4y = -19$

$(1, -6)$

8) $-9x - 3y = -2$
 $y = -3x - 4$

No solution

Solve each system by elimination.

9) $6x + 2y = -6$
 $7x + 4y = 8$

$(-4, 9)$

10) $5x + 3y = 15$
 $10x + 6y = 20$

No solution

11) $-6x - 9y = 0$
 $-24x = 36y$

Infinite number of solutions

12) $-3 - 3y = 12x$
 $-5 - y = 2x$

$(2, -9)$