






















Name: _____ Date: _____ Period: _____

Mystery Coordinate Plane Graphing Activity

There is a picture hidden on the coordinate plane. Connect the points with lines to reveal it. Hint: They are small and yellow!

(5, 0)	(5, -5)	(-10.5, 3.5)	(-3.5, 2.5)	(-5, 4.5)	(1.5, -7.5)	(1, -2)
(5, 2)		(-11, 3.5)	(-4, 4)	(-5, 4)	(1, -7.5)	(0, -2)
(5, 5)	(-5, -2)	(-10, 1)	(-4, 5)	(-4, 4)	(0, -7.5)	
(4, 7)	(-6, -2)	(-9, 0)	(-3, 6)		(-1, -7.5)	(2.5, -1.5)
(3, 8)	(-7, -1)		(-2, 6.5)	(4, 5)	(-1.5, -7.5)	(2, -1.5)
(0, 9)	(-8, 0)	(-2, 4)	(-1, 6)	(5, 4.5)	(-2, -7)	(2, -1)
(-3, 8)	(-9, 0)	(-2.5, 3.5)	(0, 5)	(5, 4)	(-2, -5)	(1, -1)
(-4, 7)	(-8, -2)	(-2, 2.5)		(4, 4)	(2, -5)	(1, -2)
(-5, 5)	(-7, -3)	(-1.5, 3.5)	(-5, 4.5)			(1.5, -2)
(-5, 2)	(-5, -4)	(-2, 4)	(-1.5, 5.5)	(-5, -2)	(6, -9)	(2, -1.5)
(-5, 0)	(-5, -8)		(-2.5, 5.5)	(-5, -3)	(6, -10)	
(-5, -2)	(-4, -9)	(2, 4)	(-3, 5)	(-4, -4)	(6, -11)	(-2, -11)
(-3, -4)	(-2, -10)	(2.5, 3.5)	(-3.5, 4)	(-3.5, -4.5)	(5.5, -11.5)	(-2.5, -12)
(3, -4)	(-2, -11)	(2, 2.5)	(-3, 3)	(-3, -4)	(5, -11)	(-2, -12.5)
(5, -2)	(0, -11)	(1.5, 3.5)	(-2, 2)		(4.5, -12)	(-1, -12.5)
(5, 0)	(0, -10)	(2, 4)	(-1, 2.5)	(-4, -4)	(4, -11)	(-5, -12)
	(1, -10)		(-5, 3)	(-4, -7)	(4.5, -10)	(0, -11)
(3, -1)	(1, -11)	(0, 5)	(0, 3.5)	(-5, -6.5)	(5, -9)	
(0, -1)	(3, -11)	(1, 6)	(.5, 3)			(3, -11)
(-3, -1)	(3, -10)	(2, 6.5)	(1, 2.5)	(5, -2)	(-2.5, -1.5)	(3.5, -12)
(-2, -2)	(5, -9)	(3, 6)	(2, 2)	(5, -3)	(-2, -1.5)	(3, -12.5)
(-1, -3)		(4, 5)	(3, 3)	(4, -4)	(-2, -1)	(2, -12)
(1, -3)	(-8, 0)	(4, 4)	(3.5, 4)	(3.5, -4.5)	(-1, -1)	(1, -11)
(2, -2)	(-8, 1)	(3.5, 2.5)	(3, 5)	(3, -4)	(-1, -2)	
(3, -1)	(-7, 2)	(3, 2)	(2.5, 5.5)		(-1.5, -2)	You're done and now you can color!
	(-7, 3)	(2, 1.5)	(1.5, 5.5)	(4, -4)	(-2, -1.5)	
(5, -2)	(-8.5, 2)	(1, 2)	(.5, 4.5)	(4, -7)		
(6, -5)	(-9, 3)	(0, 3)	(0, 4)	(5, -6.5)	(-1, -2)	
(6, -8)	(-9, 4)	(-1, 2)	(-5, 4.5)		(0, -2)	
(6, -9)	(-10, 4)	(-2, 1.5)		(2, -5)	(0, -1)	
(5, -9)	(-10, 3)	(-3, 2)	(-4, 5)	(2, -7)	(1, -1)	